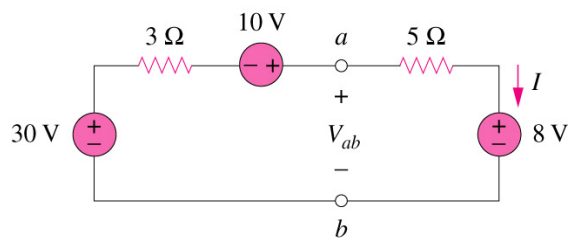
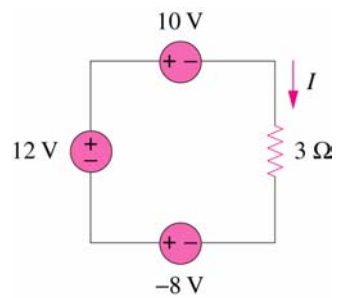


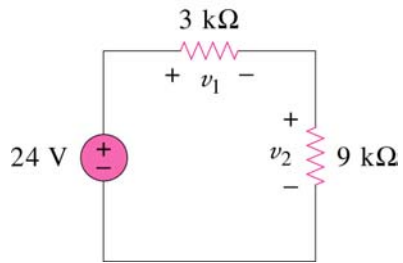
Problem 1: Find I and V_{ab} in the circuit below



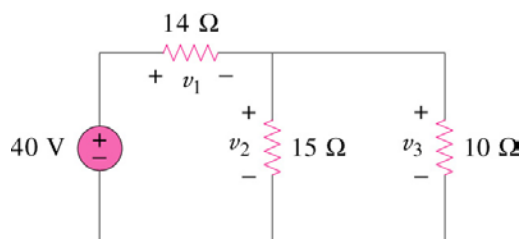
Problem 2: Find I in the circuit below



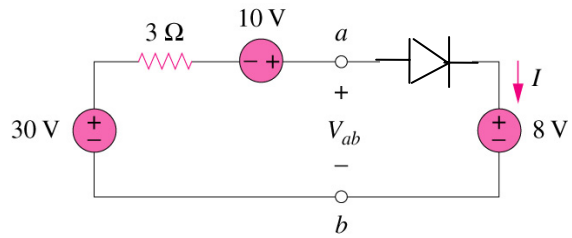
Problem 3: Find v_1 and v_2 in the circuit below



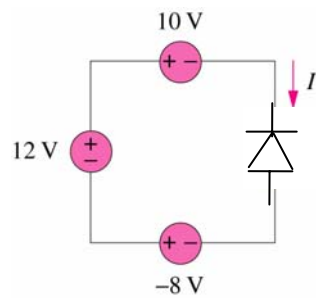
Problem 4: Find v_1 , v_2 and v_3 in the circuit below



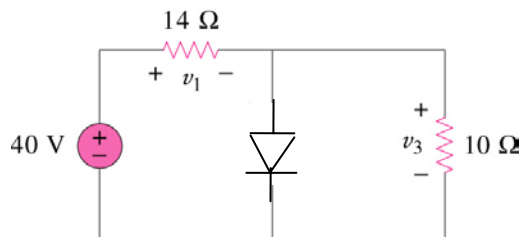
Problem 5: Find I and V_{ab} in the circuit below



Problem 6: Find I in the circuit below



Problem 7: Find v_1 and v_3 in the circuit below



Problem 8: Find v_1 and v_3 in the circuit below

